



## Job Opportunities Assessment – Example Questions

Before you start the assessment, have a look through this set of example questions. They will give you a good feel for the types of questions that we use, and how they will look on your screen.

---

This document is provided by Defence Force Recruiting (DFR). Contact your Case Manager on 13 19 02 for any enquiries.

**Question Status**

1 2 3 4 5

Not answered

Answered

Flagged

**Timer**

10 minutes remaining

[← Exit](#)

**Cognitive Ability Test - Example Questions** Question 1 of 5

Four of the following are alike in some way. Please select the other two.

- walk
- train
- bus
- car
- boat
- run

[Flag Question](#) [Show Answer →](#)

**Answer?** The answer here is “walk” and “run”, as all of the other things are a type of transport.

**Question Status**


1 2 3 4 5

Not answered

Answered

Flagged

**Timer**



10 minutes remaining

[← Exit](#)

**Cognitive Ability Test - Example Questions** Question 2 of 5

What is the missing number that should take the place of the question mark?

?	7	10
6	9	...
8	...	14

Type your answer here:

[← Previous Question](#) [Flag Question](#) [Show Answer →](#)

**Answer?** The answer is 4.

In questions like this sometimes it can be useful to work out what the numbers are in the dotted boxes. In this example notice that you can get the right answer by working either across or up & down

**Question Status**

1 2 3 4 5

Not answered

Answered

Flagged

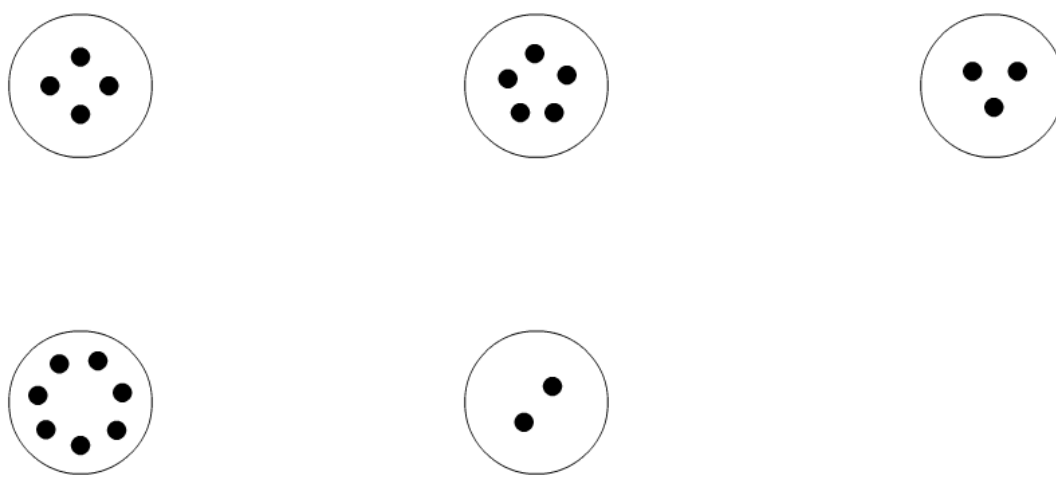
**Timer**

10 minutes remaining

[← Exit](#)

**Cognitive Ability Test - Example Questions** Question 3 of 5

Which two of the five items do not belong with the others?



[← Previous Question](#) [Flag Question](#) [Show Answer →](#)

**Answer?** You would need to highlight both of the shapes that have an even number of dots in them (i.e. the circle containing 2 dots & the circle containing 4 dots)

**Question Status**

1 2 3 4 5

Not answered

Answered

Flagged

**Timer**

9 minutes remaining

[← Exit](#)

**Cognitive Ability Test - Example Questions** Question 4 of 5

**Which two statements together PROVE that Megan has brown hair?**

- Megan likes long hair
- Megan's hair is not blonde
- Jane has long hair
- The only hair that Jane likes is brown
- Jane likes the colour of Megan's hair

[← Previous Question](#) [Flag Question](#) [Show Answer →](#)

**Answer?** You would need to select “The only hair that Jane likes is brown” and “Jane likes the colour of Megan’s hair”. Together these two statements prove that Megan has brown hair.

**Question Status**

1 2 3 4 5

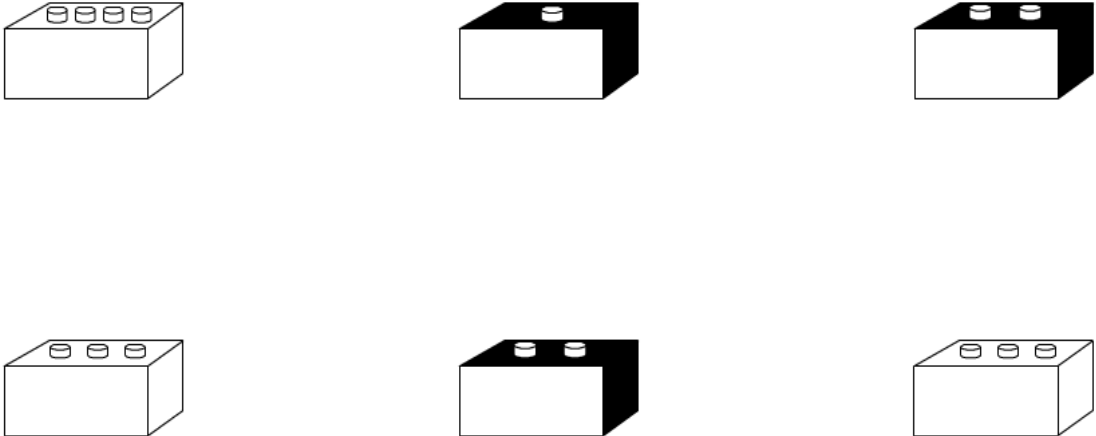
Not answered  
 Answered  
 Flagged

**Timer**  
9 minutes remaining

[Exit](#) [Previous Question](#) [Flag Question](#) [Show Answer](#)

**Cognitive Ability Test - Example Questions** Question 5 of 5

Which two of the six items do not belong with the others?



**Answer?** Because they do not belong with their respective groups, you would need to select the only shape that is shaded with a single knob plus the only non-shaded shape with four knobs.

**Question Status**

1	2	3	4	5	6	7	8
9	10	11	12	13	14	15	16
17	18	19	20	21	22	23	24
25	26	27	28	29	30	31	32
33	34	35	36	37	38	39	40
41	42	43	44	45	46	47	48
49	50	51					

Not answered  
 Answered  
 Flagged

**Timer**  
20 minutes remaining

[Exit](#)

**Cognitive Ability Test** Question 2 of 51

What is the missing number that should take the place of the question mark?

**7    14    14    ?    21    28    28**

Type your answer here:

[Previous Question](#)    [Flag Question](#)    [Next Question](#)

**Answer?**    The answer is 21.  
Past the number 7, numbers in the sequence run in pairs and go up by seven each time.

Question Status							
1	2	3	4	5	6	7	8
9	10	11	12	13	14	15	16
17	18	19	20	21	22	23	24
25	26	27	28	29	30	31	32
33	34	35	36	37	38	39	40
41	42	43	44	45	46	47	48
49	50	51					

Not answered  
 Answered  
 Flagged

**Timer**  
20 minutes remaining

[← Exit](#)

**Cognitive Ability Test** Question 5 of 51

Abby has cycled 70 kilometres on her bike at an average speed of 20 kilometres per hour. How many hours has Abby been cycling for?

Type your answer here:  hours

[← Previous Question](#) [Flag Question](#) [Next Question →](#)

**Answer?** The answer is 3.5.  
This is calculated as follows:  $70\text{km} \div 20\text{km per hour} = 3.5$  hours (which is the time taken in hours)